

Advanced Kids Series
First Terminal Evaluation 2077

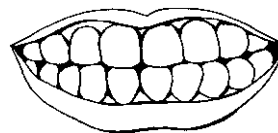
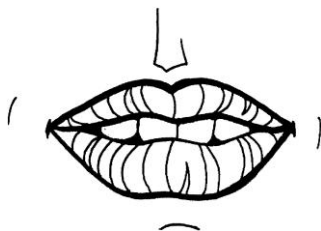

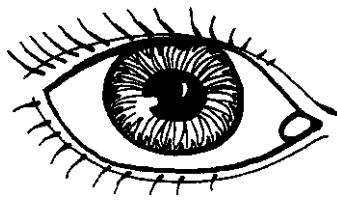
Subject : Science

UKG

Name :

Roll No.

1. Name the following parts of our face.




2. Match the following.



eat



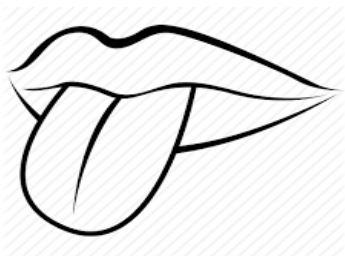
touch



see



walk



smell



taste


3. Complete the sentences with the correct words.

- a) I have _____ hands. (two/one)
- b) I _____ with my eyes. (see/hear)
- c) I _____ with my hands. (walk/clap)
- d) I hear with my _____. (nose/ears)
- e) I _____ with my legs. (sit/walk)
- f) I chew food with my _____. (mouth/teeth)
- g) I have _____ fingers. (two/ten)



4. Name the five sense organs and write their functions.

	Name	Function
1.		
2.		
3.		
4.		
5.		



5) Tick (✓) the correct answer.

a) We

speak
hear

 with our mouth.

b) We

sleep
think

 with our head.

c) We

chew
taste

 with our teeth.

d) Non-living things

grow
do not grow

e) A lion is a

living
non-living

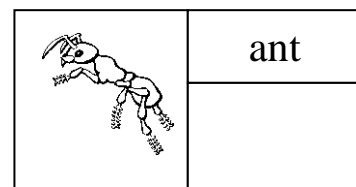
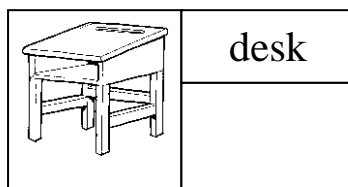


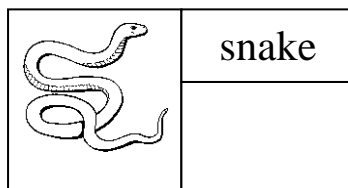
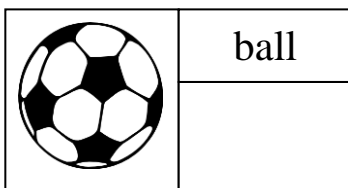
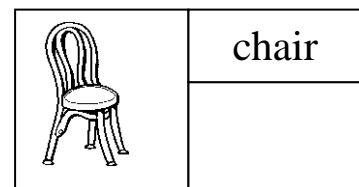
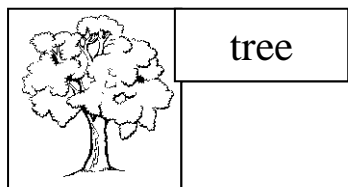
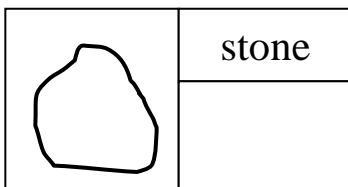
 thing.

f) Stone


sinks
floats

 in water.

6. Write L for living things and N for non living things.



7. Colour the plant and name its parts.



8. Re-arrange the jumbled letters to make the plants name.

ppial tree

pein tree

magon tree

rseo bush

starwbrrey tree

ptooat

tmatoo

msutrad



9. Name the following.

Big plants : _____

Shrubs : _____

Herbs : _____

Climbers : _____

Thorny plants _____

10 Draw one tree and colour it.